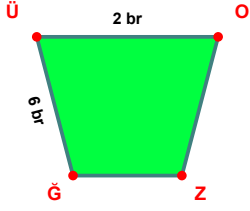
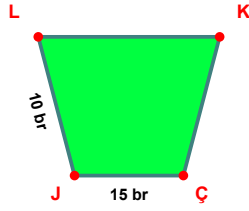


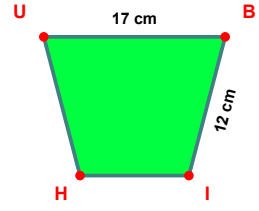
SORU: Aşağıdaki şekillerde verilen, kenar uzunlukları farklarını bulunuz.



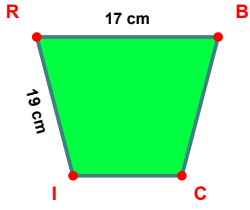
$$|ĞÜ| - |ÜÖ| = \dots\dots\dots$$



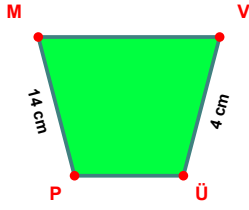
$$|ÇJ| - |JL| = \dots\dots\dots$$



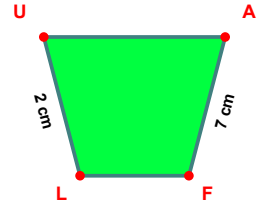
$$|UB| - |BI| = \dots\dots\dots$$



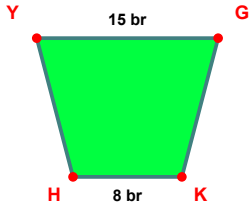
$$|IR| - |RB| = \dots\dots\dots$$



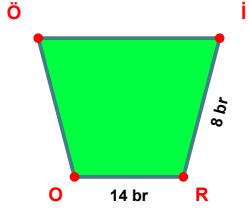
$$|PM| - |VÜ| = \dots\dots\dots$$



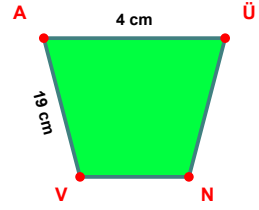
$$|AF| - |LU| = \dots\dots\dots$$



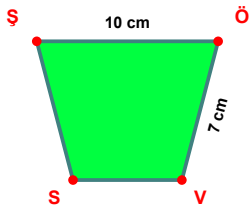
$$|YG| - |KH| = \dots\dots\dots$$



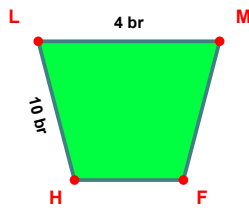
$$|RO| - |İR| = \dots\dots\dots$$



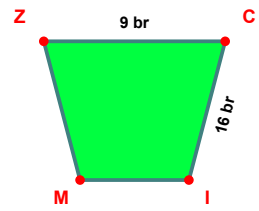
$$|VA| - |AÜ| = \dots\dots\dots$$



$$|ŞÖ| - |ÖV| = \dots\dots\dots$$

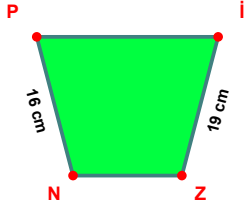


$$|HL| - |LM| = \dots\dots\dots$$

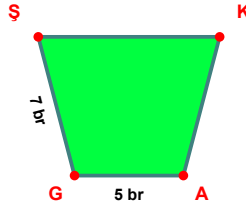


$$|CI| - |ZC| = \dots\dots\dots$$

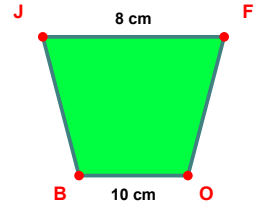
SORU: Aşağıdaki şekillerde verilen, kenar uzunlukları farklarını bulunuz.



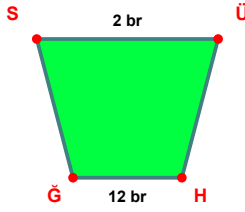
$$|İZ| - |NP| = \dots\dots$$



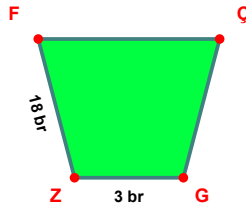
$$|GS| - |AG| = \dots\dots$$



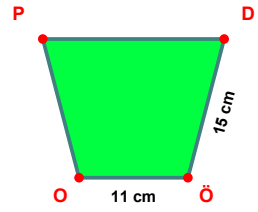
$$|OB| - |JF| = \dots\dots$$



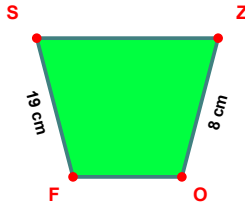
$$|HĞ| - |ŞÜ| = \dots\dots$$



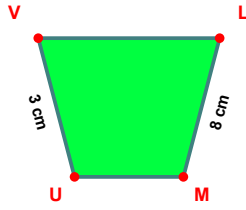
$$|ZF| - |GZ| = \dots\dots$$



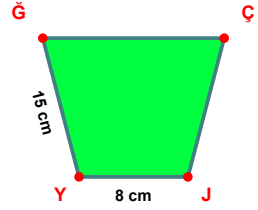
$$|DÖ| - |ÖO| = \dots\dots$$



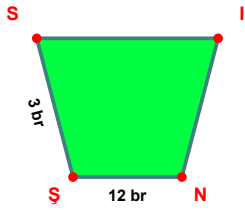
$$|FS| - |ZO| = \dots\dots$$



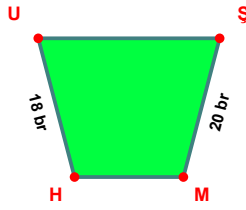
$$|LM| - |UV| = \dots\dots$$



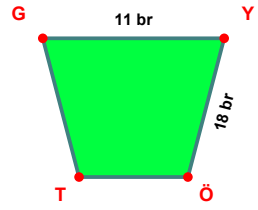
$$|YĞ| - |JY| = \dots\dots$$



$$|NŞ| - |ŞŞ| = \dots\dots$$



$$|ŞM| - |HU| = \dots\dots$$



$$|YÖ| - |GY| = \dots\dots$$

SÜREÇ ODAKLI DEĞERLENDİRME ÖLÇEĞİ

Doğru Sayısı: / 24

Öğretmen ilgili kutucuğu işaretler.

Geliştirilmeli (0-8)

İyi (9-14)

Çok İyi (15-20)

Mükemmel (21-24)

☐☐☐☐

Hazırlayan:

Bu bölüme sınıfınızın ilgili kazanıma yönelik genel durumuna ilişkin gözlem ve izlenimlerinizi, öğrencilerinizin bu kazanımla ilgili öğrenme eksikliklerini ve bu eksikliklerin giderilmesi amacıyla yaptığınız/yapmayı planladığınız faaliyetleri not edebilirsiniz.

No	Adı - Soyadı	Toplam Puan	Değerlendirme
1			
2			
3			
4			
5			
6			
7			
8			
9			
10			
11			
12			
13			
14			
15			
16			
17			
18			
19			
20			
21			
22			
23			
24			
25			
26			
27			
28			
29			
30			
31			
32			
33			
34			
35			

Hazırlayan: